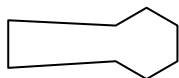




Determine which letter BEST represents the shapes that were used to create the figure shown.

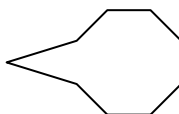
Answers

1)



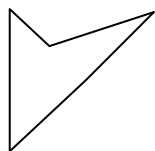
- A. A Quadrilateral and a Hexagon
- B. A Square and an Octagon
- C. A Pentagon and an Octagon
- D. A Triangle and a Heptagon

2)



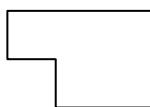
- A. A Hexagon and an Octagon
- B. A Quadrilateral and an Octagon
- C. A Triangle and an Octagon
- D. A Pentagon and a Heptagon

3)



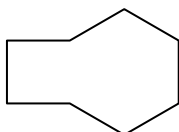
- A. A Quadrilateral and a Heptagon
- B. A Triangle and a Triangle
- C. A Pentagon and a Hexagon
- D. A Square and a Pentagon

4)



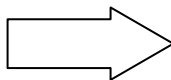
- A. A Quadrilateral and a Square
- B. A Triangle and a Rectangle
- C. A Triangle and an Octagon
- D. A Pentagon and a Hexagon

5)



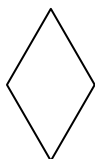
- A. A Rectangle and a Pentagon
- B. A Triangle and a Heptagon
- C. A Triangle and an Octagon
- D. A Square and a Hexagon

6)



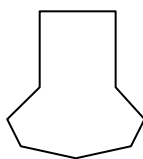
- A. A Quadrilateral and a Hexagon
- B. A Square and a Quadrilateral
- C. A Triangle and a Rectangle
- D. A Quadrilateral and a Heptagon

7)



- A. A Rectangle and a Heptagon
- B. A Triangle and a Quadrilateral
- C. A Triangle and a Triangle
- D. A Heptagon and an Octagon

8)



- A. A Rectangle and a Heptagon
- B. A Square and a Pentagon
- C. A Quadrilateral and a Pentagon
- D. A Heptagon and an Octagon

1. _____

2. _____

3. _____

4. _____

5. _____

6. _____

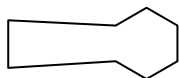
7. _____

8. _____



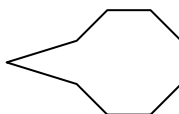
Determine which letter BEST represents the shapes that were used to create the figure shown.

1)



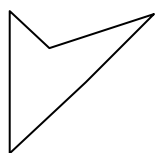
- A. A Quadrilateral and a Hexagon
- B. A Square and an Octagon
- C. A Pentagon and an Octagon
- D. A Triangle and a Heptagon

2)



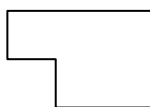
- A. A Hexagon and an Octagon
- B. A Quadrilateral and an Octagon
- C. A Triangle and an Octagon
- D. A Pentagon and a Heptagon

3)



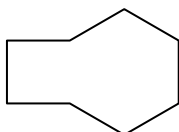
- A. A Quadrilateral and a Heptagon
- B. A Triangle and a Triangle
- C. A Pentagon and a Hexagon
- D. A Square and a Pentagon

4)



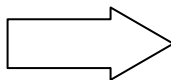
- A. A Quadrilateral and a Square
- B. A Triangle and a Rectangle
- C. A Triangle and an Octagon
- D. A Pentagon and a Hexagon

5)



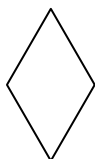
- A. A Rectangle and a Pentagon
- B. A Triangle and a Heptagon
- C. A Triangle and an Octagon
- D. A Square and a Hexagon

6)



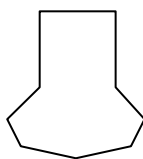
- A. A Quadrilateral and a Hexagon
- B. A Square and a Quadrilateral
- C. A Triangle and a Rectangle
- D. A Quadrilateral and a Heptagon

7)



- A. A Rectangle and a Heptagon
- B. A Triangle and a Quadrilateral
- C. A Triangle and a Triangle
- D. A Heptagon and an Octagon

8)



- A. A Rectangle and a Heptagon
- B. A Square and a Pentagon
- C. A Quadrilateral and a Pentagon
- D. A Heptagon and an Octagon

Answers

- 1. **A**
- 2. **C**
- 3. **B**
- 4. **A**
- 5. **D**
- 6. **C**
- 7. **C**
- 8. **A**